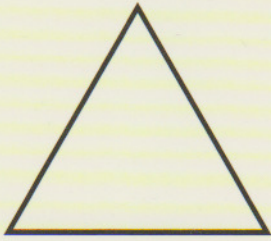



Geometriska figurer




En **triangel**
har tre hörn



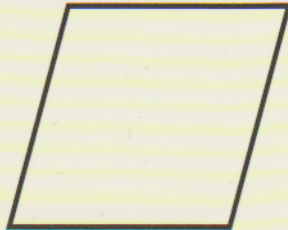
En **kvadrat**
har fyra hörn




En **rektangel**
har fyra hörn



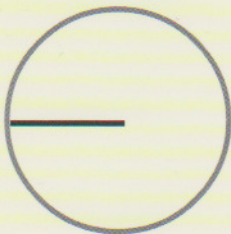
En **cirkel**



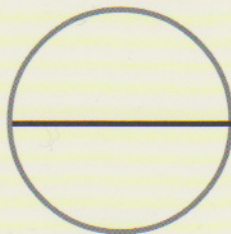
En **romb**
har fyra hörn



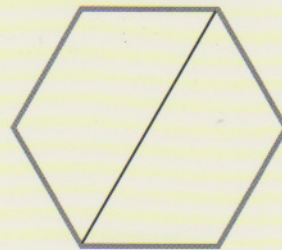
En **parallelogram**
har fyra hörn



Radie
i en cirkel



Diameter
i en cirkel



Diagonalen
i en sexhörning